

Mathematics Revision
Grade 2: Term 1 & 2

DAILY ACTIVITIES: (refer to flip-file)

1. Counting forwards and backwards from 0-150 in 1's, 2's, 3's, 4's, 5's, 10's.
2. Bonds up to 15.
3. Time tables (1x - 5x).

NUMBER OPERATIONS

1. Addition and Subtraction:

$$43 + 15 = 58$$

$$37 + 12 = 49$$

$$56 - 32 = 24$$

$$63 - 31 = 32$$

2. Place Value:

$$3T + 9U = 39$$

$$4T + 6U = 46$$

$$2U + 1T = 12$$

$$30 = 3 \text{ Tens}$$

3. Value: Give the value of the underlined digit (how much is it worth?)

$$\underline{3}1 = 30$$

$$\underline{1}5 = 10$$

4. Break up: eg. $22 = 20 + 2$

$$37 = 30 + 7$$

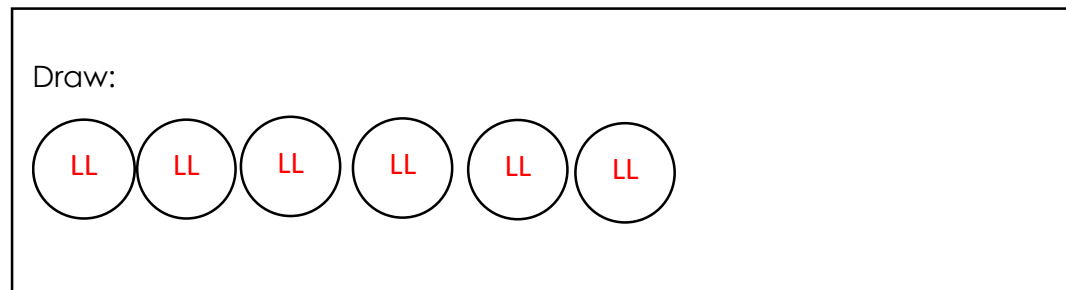
$$19 = 10 + 9$$

$$43 = 40 + 3$$

$$23 = 20 + 3$$

5. Word Problems

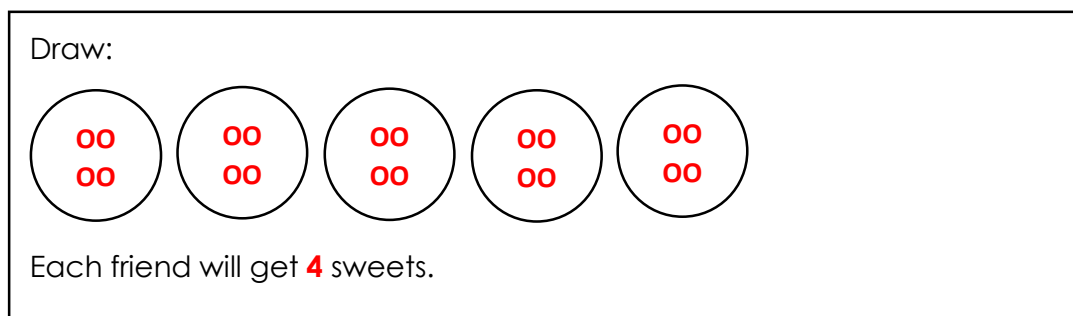
There are 6 children. How many legs are there altogether?



Sum: $2 + 2 + 2 + 2 + 2 + 2 = 12$

Story: *There are 12 legs altogether.*

Share 20 sweets equally amongst 5 friends. How many sweets does each friend get?



There are 25 girls and 34 boys present in grade 2 today. How many learners are present in total?

Sum: $25 + 34 = 59$

Story: *There are 59 learners in total.*

6. Money: Add up the coins and notes





I had R15,00. I bought a cupcake for R5,00 and a chocolate for R3,50. How much money do I have left?

Sum: $R15,00 - R5,00 - R3,50 = R6,50$

Story: I have R6,50 left.

PATTERNS

Number Patterns: Complete the patterns below

150 145 140 135 130 125

44 40 36 32 28 24

130 120 110 100 90 80


97 98 99 97 96 95

MEASUREMENT

Time:

Draw hands to show:

7 o'clock



Write the time shown below:

Half past 9

