

Name: _____

Copy the date below:

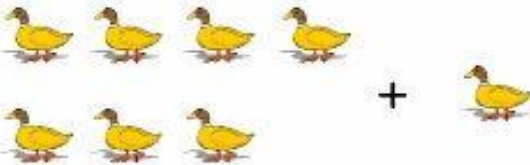
8 June

Add the picture problems and write the answers.


Name _____

Horizontal Addition


Read the problem. Write the answer on the line.




7 + 1 = _____




3 + 4 = _____




4 + 1 = _____




6 + 3 = _____




3 + 2 = _____



5 + 4 = _____



9 + 1 = _____



7 + 3 = _____

Name: _____

Copy the date below:

9 June

Subtract the picture problems and write the answers.

Let's Practice Subtraction!

Count the pictures and subtract.

Example:



5 take away 3 equals 2


1 2 3 4 5 6 7 8 9 10



$4 - 3 = \underline{\quad}$



$2 - 2 = \underline{\quad}$




$3 - 1 = \underline{\quad}$



$5 - 2 = \underline{\quad}$


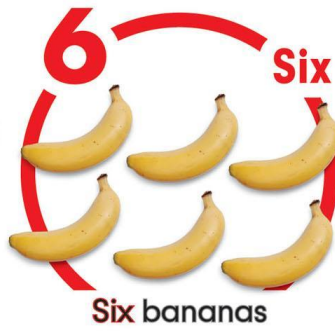


$3 - 2 = \underline{\quad}$



$5 - 1 = \underline{\quad}$

Numbers 1 to 20



Name: _____

Copy the date below:

10 June

Oral:

Use the number chart 1 to 20 to practice your counting.

Count forward/backward 0 to 20 and 20 to 0.

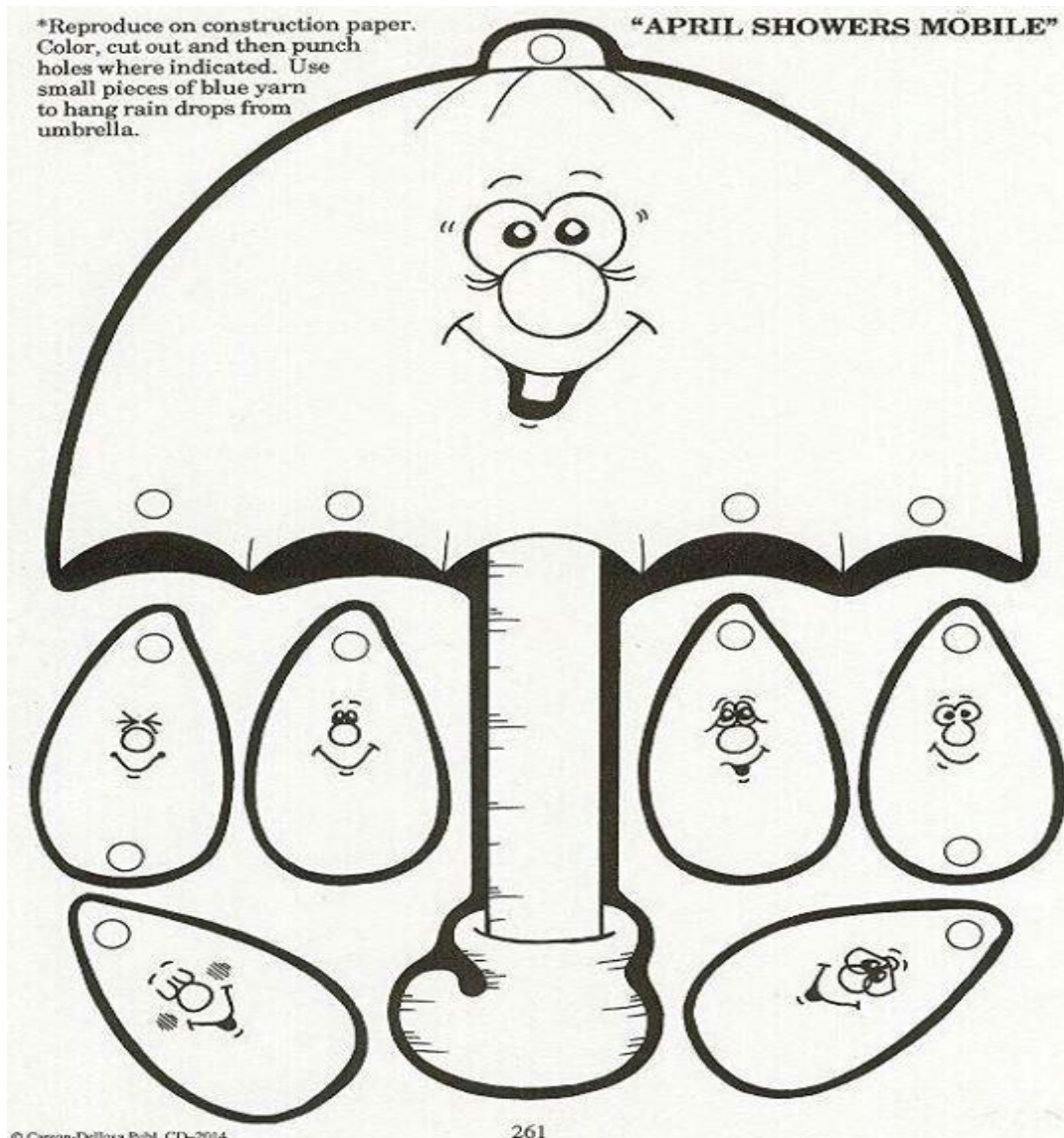
Count in 2's 0 to 20.

Know date of birth/address and telephone number.

Know days of the week/months of the year.

Know seasons and weather.

Colour/cut out and make your own rain mobile and season/months of the year wheel.



Season Wheel

