



Memorandum

<u>NAME OF LEARNER:</u>
MATHEMATICS BASELINE TEST: SEPTEMBER 2020
GRADE 4

MARKS: 15 DURATION: 1 Hour

This test consists of 6 pages, including the cover page

Instructions and information to the learner

1. Read the questions carefully
2. Answer **ALL** the questions
3. Circle only the letter for the **correct answer**, e.g. If the correct answer in 1. is D, you should only circle (D)
4. There is only one correct answer in each question
5. This question paper consists of **15** questions. All are multiple choice.
6. Diagrams are **NOT** drawn to scale

1. Write down the place value of the underlined digit: 888

A 8

B 80

C 8 Tens

D 8 Hundreds

2. Which of the following is TRUE when arranged from smallest to biggest?

314; 143; 431; 134

A. 143, 134, 314, 431

B. 431, 314, 143, 134

C. 314, 143, 431, 134

D. 134, 143, 314, 431

3. What is $100 + 4 + 30$?

A. 100304

B. 1430

C. 143

D. 134

4. What is the sum of 473 and 145?

A 6 118

B 5 118

C 618

D 518

5. What is $603 - 274 = ?$

A. 877

B. 471

C. 239

D. 329

6. Thato and Peter had 30 marbles altogether.
Peter had 13 marbles.
How many more marbles does Thato have than Peter?

A 43

B 17

C 13

D 4

7. Two lead pencils cost R 6.00.
How much do five lead pencils cost?


A R 10,00

B R 12,00

C R 13, 00

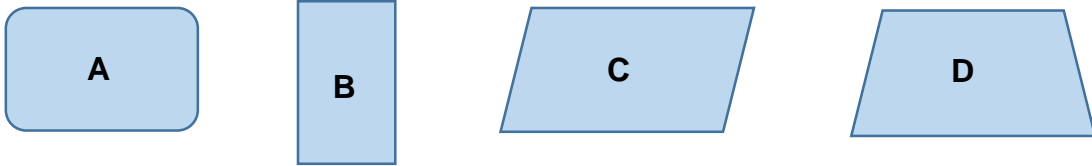
D R 15,00

8. What is the total number of bananas in the squares below?



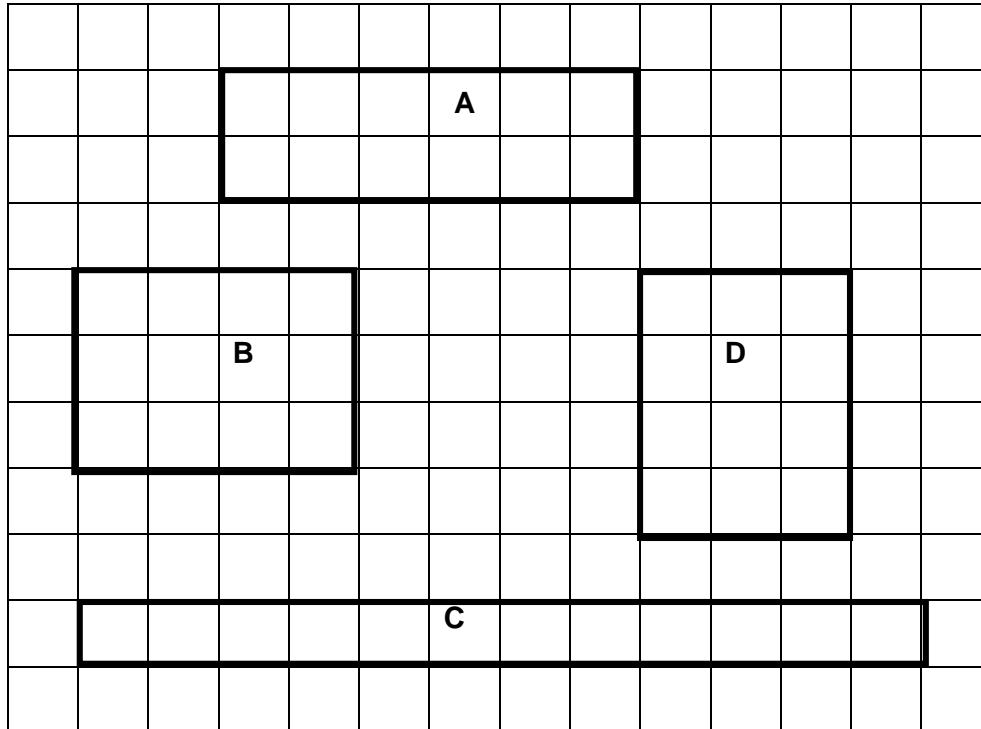
- A 7
- B 10
- C 63
- D 70

9. Which of the following shapes is a rectangle?



- A Shape A
- B Shape B
- C Shape C
- D Shape D

10. Which rectangle has the largest perimeter?



- A Rectangle A
- B Rectangle B
- C Rectangle C
- D Rectangle D
11. Sam shared his bag of 24 sweets equally between himself and his 2 friends. How many sweets did each get?
- A 8
- B 12
- C 21
- D 27
12. Mrs Mkhize gave 6 children some sweets. Each child got 5 sweets. How many sweets were there in total?
- A 5 sweets

- B 6 sweets
- C 11 sweets
- D 30 sweets

13. Mom bought 2 bags of oranges.
In each bag there were 16 oranges. She has 2 children.
For how many days can she give each child 2 oranges?

- A 32 days
- B 22 days
- C 16 days
- D 8 days

14. What fraction part is the shaded part?



- A $\frac{1}{5}$
- B $\frac{2}{5}$
- C $\frac{2}{6}$
- D $\frac{1}{6}$

15. The netball coach gives half an orange to each player per day.
There are 14 players.
How many oranges does she need for 3 days?

- A 28 oranges
- B 21 oranges
- C 17 oranges
- D 7 oranges