



Name: _____ Date: _____

Number Operations	Patterns/Functions/ Algebra	Measurement	Space & Shape	Data
25	5	6	9	5

Number Operations

A. Use the number line below to answer questions 1-3:



1. Compare numbers:

1.1 2 more than 50 is _____

1.2 3 less than 47 is _____

1.3 5 more than 49 is _____ (3)

2. Use > < or = :

2.1 58 _____ 60

2.2 $50 + 10$ _____ $30 + 30$

2.3 52 _____ 61 (3)

3. Addition/Subtraction:

3.1 $42 + 13 =$ _____

3.2 $58 - 15 =$ _____ (2)

B. Arrange the following numbers in the correct order from smallest to biggest:

65 59 110 88 106

_____ (1)

C. Place Value:

1. Give the Place Value of the following numbers:

1.1 $41 = \underline{\hspace{2cm}}$ tens + $\underline{\hspace{2cm}}$ units

1.2 $\underline{\hspace{2cm}} = 3 \text{ tens}$ (2)

2. Break up the following numbers:

2.1 $26 = \underline{\hspace{2cm}} + \underline{\hspace{2cm}}$

2.2 $\underline{\hspace{2cm}} = 40 + 9$

2.3 $18 = 10 + \underline{\hspace{2cm}}$ (3)

D. Grouping and Sharing

1. Complete the following sums:



1.1 $\underline{\hspace{2cm}} + \underline{\hspace{2cm}} + \underline{\hspace{2cm}} + \underline{\hspace{2cm}} + \underline{\hspace{2cm}} = \underline{\hspace{2cm}}$ (1)

1.2 $\underline{\hspace{2cm}} \times \underline{\hspace{2cm}} = \underline{\hspace{2cm}}$ (1)

2. Share 25 marbles between 5 boys:

Draw



Each boy gets $\underline{\hspace{2cm}}$ marbles. (2)

E. Word Problems

1. James had 46 marbles. At the park he lost 13 marbles. How many does he have now?

Sum: $\underline{\hspace{10cm}}$

Story: $\underline{\hspace{10cm}}$ (2)

2. There are 38 books on the shelf. Meg puts 10 more books on the shelf and Sam puts 4 more books on the shelf. How many books are on the shelf altogether?

Sum: _____

Story: _____ (2)

F. Money

1. Colour the coins that make up the following amounts:

1.1 R 10,50	
1.2 R 5,00	
1.3 R 7,00	

(3)

Patterns, Functions and Algebra

1. Complete the following number patterns:

1.1 120 125 130 _____

1.2 24 28 32 _____

1.3 90 87 84 _____

(3)

2. Draw the next pattern:

2.1  _____ (1)

3. Extend the following pattern:

 _____ (1)

Measurement

G. Length

1.1 Measure the line from A to B: (1)

A _____ B

= _____ cm


1.2 Draw a line (7 cm) using your ruler: (1)

H. Time


1.1 How many hours are there in a day? _____ (1)

1.2 Draw hands on the clock face.

5 o' clock



1.3 Write the time shown on the clock face. (1)



(1)

1.4 Number the following months of the year in the correct order from 1-5.

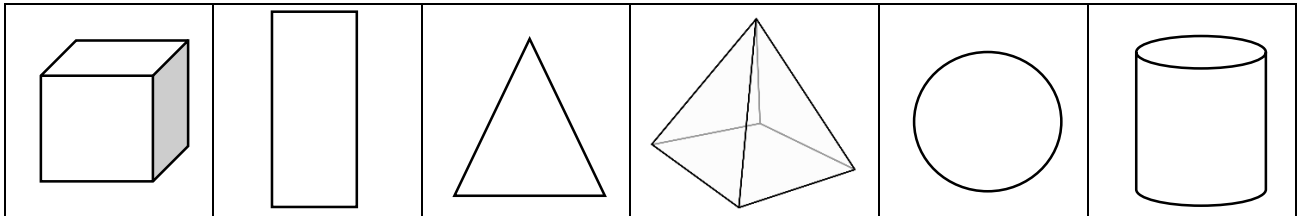
July	
September	
August	
October	
June	

(1)

Space and Shape

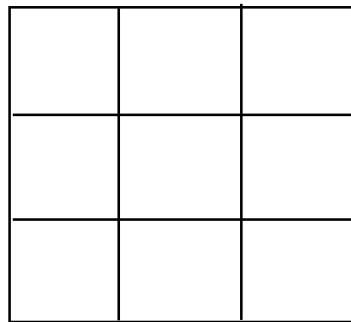
1. Match the correct word to the shapes below:

triangle	circle	pyramid	cylinder	cube	rectangle
----------	--------	---------	----------	------	-----------



(6)

2. Complete the instructions on the grid below:



- 2.1 Draw a blue circle in the middle of the grid.
- 2.2 Draw another red circle one block to the left of your blue circle.
- 2.3 Draw a green square in the bottom right hand corner.

(3)

Data Handling

Fill in the graph below by colouring in the correct number of blocks:

Mum bought 6 apples, 4 pears, 7 bananas, 3 oranges and 5 plums.

7					
6					
5					
4					
3					
2					
1					
	apples	pears	bananas	oranges	plums

(5)

TOTAL : 50/2 = 25 marks

