

65



Date: _____

Numbers 50 to 99

Colour in 58 circles.

	5	0
	8	

Term 3



Write an answer. The first example will guide you.

$60 + 8 = 68$	$80 + 6 =$	$50 + 3 =$
$70 + 1 =$	$90 + 5 =$	$60 + 9 =$



Write your answers for the above in words:

sixty-eight



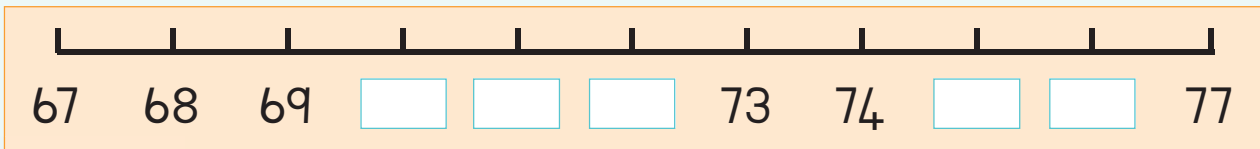
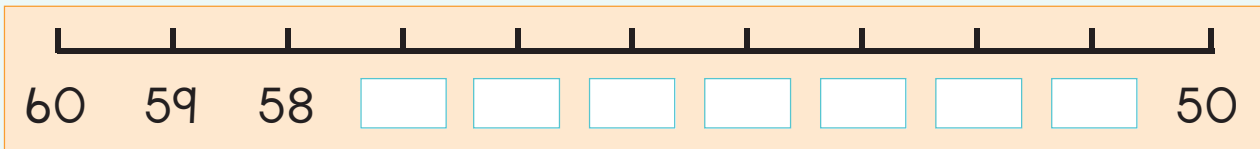
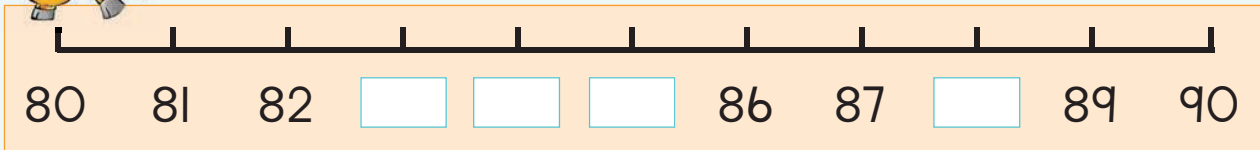


Write down two numbers that are smaller and two numbers that are bigger than the given number.

Smaller	Number	Bigger
	55	
	63	
	88	
	95	
	71	



Complete these number lines.



Cut three numbers between 50 and 99 from a magazine or newspaper. Paste them here.



Teacher: _____

Sign: _____

Date: _____

66



Date: _____

Numbers 100 to 150



Colour in 139 circles.

Two grids of 100 circles each for coloring.

1 0 0

3 0

9

Term 3



Write a number sentence for:

100 + 20 + 8

= 128



100 + 40 + 9

=

100 + 40 + 2

=

100 + 50

=

100 + 20 + 7

=

100 + 30 + 5

=



What number comes between?

103 and 105? _____


139 and 141? _____

120 and 122? _____

150 and 148? _____

146 and 148? _____



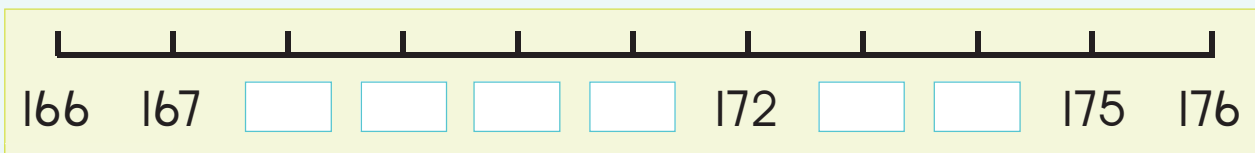
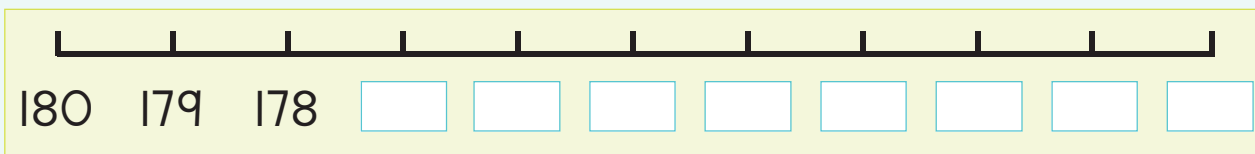
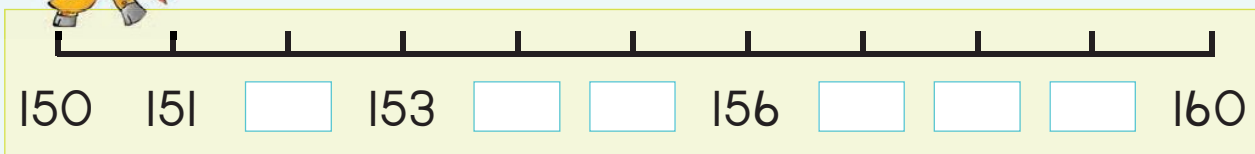


Write down two numbers smaller and two numbers bigger than the given number.

Smaller	Number	Bigger
	123	
	145	
	108	
	141	
	134	



Complete these number lines.



Cut three numbers between 100 and 150 from a magazine or newspaper. If you cannot find any, cut digits to make up the three numbers. Paste them here in order from smallest to biggest.



Teacher: _____

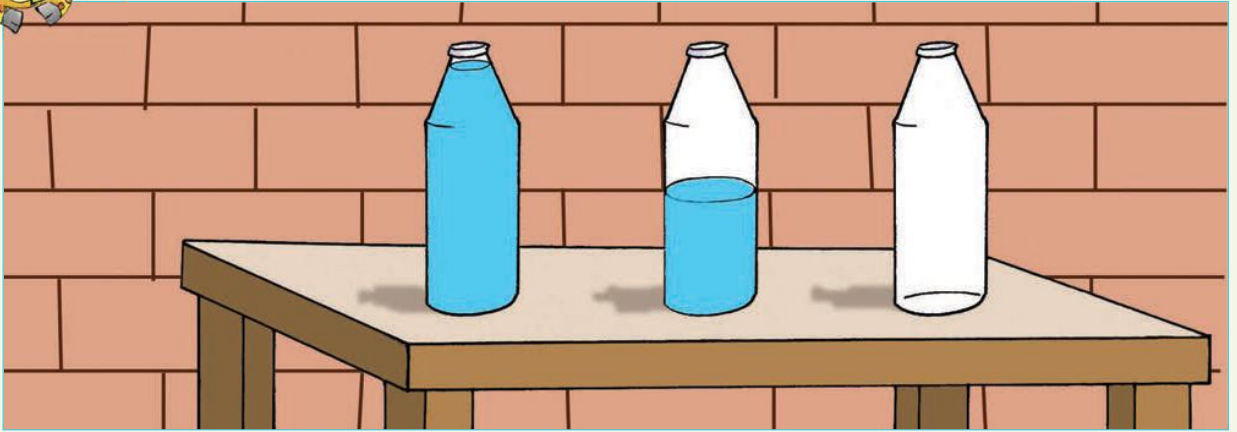
Sign: _____

Date: _____

Full, half full, empty

Date: _____


Talk about the bottles on the teacher's table.

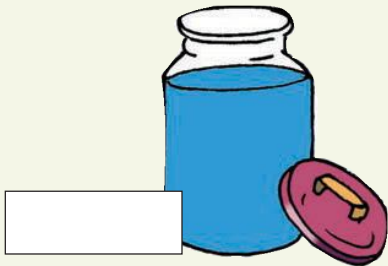


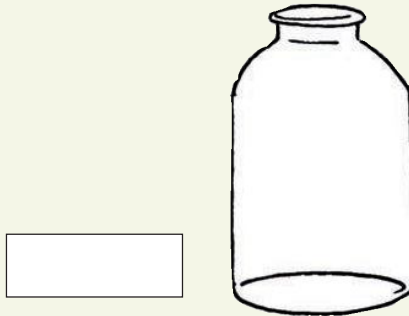
Say if the container is full, half full or empty.

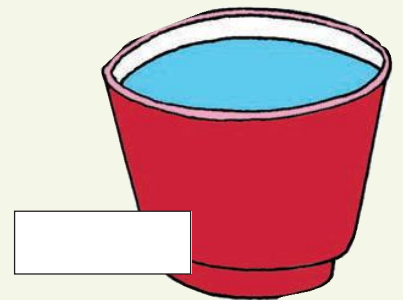




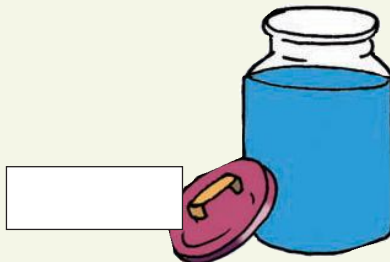


















Colour in to show how much liquid is in the containers.

Full	Half full	Empty



Draw three of your own containers. Each container can hold 4 litres. Then colour them to show that the container is:

Full	Half full	Empty



Which container holds the most?



Teacher: _____

Sign: _____

Date: _____





More capacity

Date:

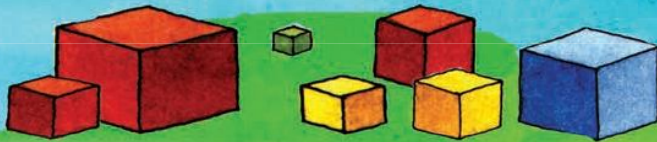
Look at the pictures. What are the children doing?



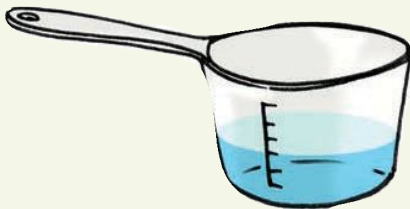
Up to where will the spoons fill the measuring cup? Colour in.

<p>One teaspoon fills the cup up to here.</p>	





How many spoons more do you need to fill the measuring cup?



Gogo uses 2 cups of milk to make a pudding.
If she doubles the recipe, how much milk will she need?



Teacher: _____

Sign: _____

Date: _____

69



Date: _____

Numbers 150 to 170

Colour in 162 circles.

100 circles grid

60 circles grid

100 00

60

2

Term 3



Write a number for:

$100 + 50 + 2 = 152$	$100 + 60 + 7 = 167$	$100 + 70 = 170$
$100 + 60 + 9 = 169$	$100 + 50 + 4 = 154$	$100 + 60 + 1 = 161$



Which numbers come between:

150 and 155

158 and 162

170 and 165

163 and 167

172 and 166



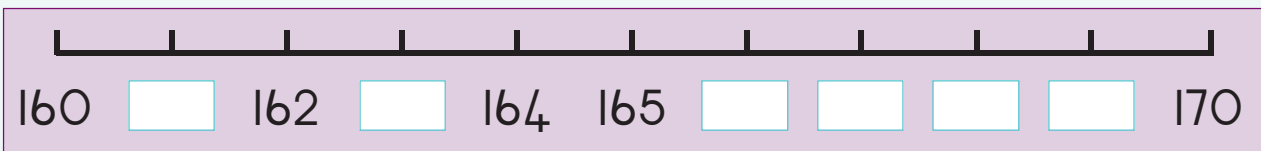
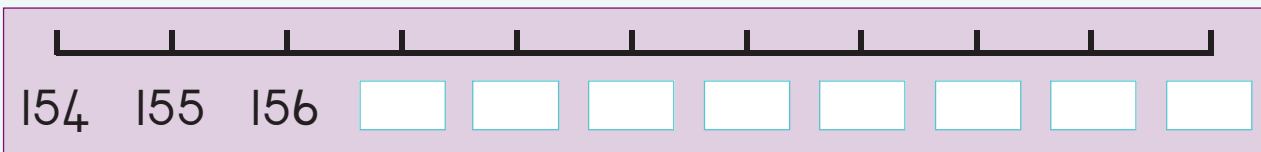
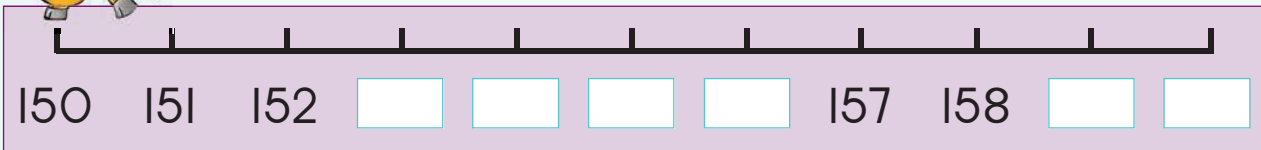


Give two numbers smaller and two numbers bigger than the given number.

Smaller	Number	Bigger
	155	
	168	
	151	
	162	
	160	



Complete the number lines.



Cut three numbers between 150 and 170 from a magazine or newspaper. Paste them here from biggest to smallest.



Teacher: _____
 Sign: _____
 Date: _____