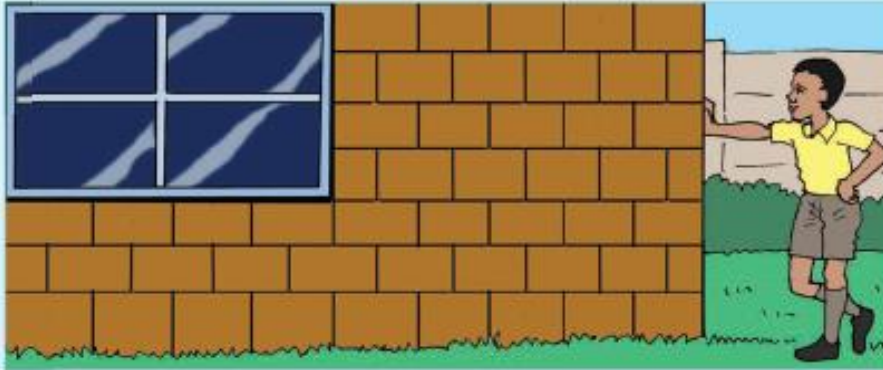


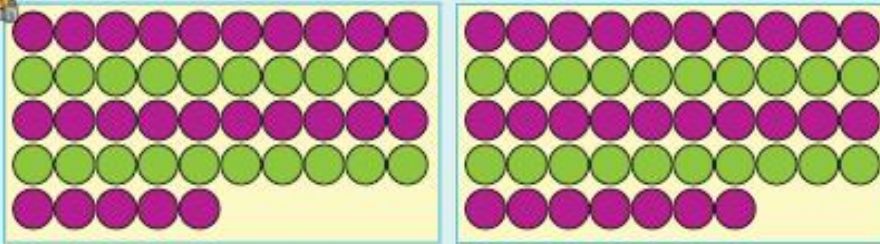
Date: _____



Numbers 40 – 50



How many beads are there?



Number	We can write it as:	Number	We can write it as:
45	$40 + 5 = 45$		$\square + \square = \square$





Complete the following.



20	21	22							
30				34					
		42							



Complete the following.

 $20 +$  $4 =$

2	4
---	---

 $+$  $=$

--	--



Write the words for:

41 _____	42 _____
43 _____	44 _____
45 _____	46 _____
47 _____	48 _____
49 _____	50 _____



Look at the first example and complete the rest.

45 = 4 tens + 5 units	44 = _____ tens + _____ units
43 = _____ tens + _____ units	41 = _____ tens + _____ units
42 = _____ tens + _____ units	48 = _____ tens + _____ units



Write the correct number in the correct column.

	Tens	Units
27		
34		
46		
41		
39		



Teacher: _____
Sign: _____
Date: _____

Time: Calendar Work



July 2000

Sunday	Monday	Tuesday	Wednesday	Thursday	Friday	Saturday
						1
2	3	4	5	6	7	8
9	10	11	12	13	14	15
16	17	18	19	20	21	22
23	24	25	26	27	28	29
30	31					

1. What was the first **day** of July 2000? _____
2. How many Mondays are there in this month? _____
3. The **date** of the last Friday of this month is _____
4. How many days are there in July? _____
5. Which month comes after July? _____
6. Count in 3's and shade the blocks in blue.

Date: _____

Data



Sort the fruit. Make your own drawing to show it. Write the total in the box.
















Through
sorting I put
the same fruit
together.





Draw a pictograph of your sorted fruit.



Look at the fruit and answer the questions

Which fruit do we have the most?

Which fruit do we have the least?



Teacher _____
Sign _____
Date _____

Word Problems

1. Peter had 41 marbles. Mike gave Peter some more marbles and then he had 65 in all. How many marbles did Mike give Peter?



2. Tess picked 12 flowers on Monday morning. In the afternoon she picked some more flowers. If Tess picked 27 flowers in all, how many did she pick in the afternoon?



3. Peter read 34 pages of his book before lunch. After lunch he read some more. If Peter read 56 pages in all, how many pages did he read after lunch?



4. Jess gave out 21 cookies to the girls in her class. She then gave out cookies to the boys in her class. If Jess gave out 45 cookies in all, how many cookies did she give out to the boys?

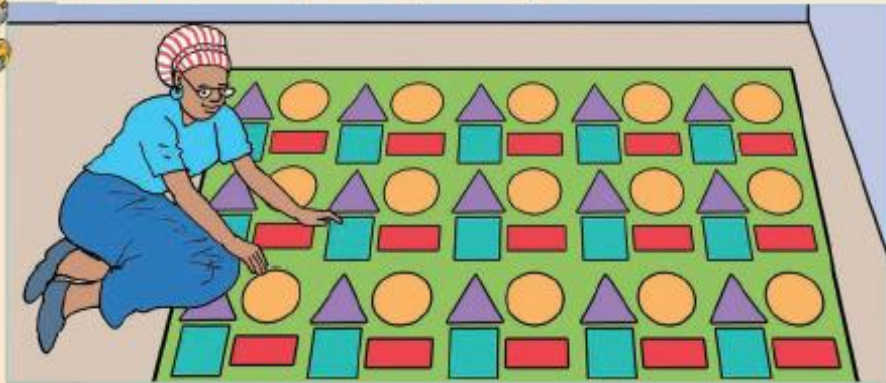


Date: _____

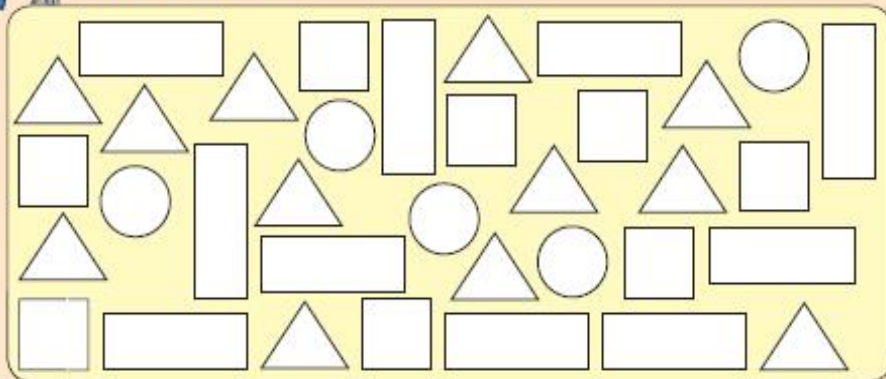
Squares, rectangles, triangles and circles



Granny made this beautiful quilt. Identify all the shapes.



Colour the squares blue, the rectangles yellow, the triangles green and the circles red.



Choose and colour the correct answer.



- straight edges
- curved edges



- straight edges
- curved edges



- straight edges
- curved edges




- straight edges
- curved edges






How many    and  do you count?



Draw your own picture using circles, squares, triangles and rectangles.



Teacher: _____
Sign: _____
Date: _____