

Date: _____

Order and compare numbers: 1 – 40



Who has more oranges?



Who has more apples?



Fill in the empty boxes on the bead count.

1	2	3	4	5		7			10
	12				16		18		
21				25	26				30
31					36				40



Look at the beads and answer the questions.

What number is smaller than 8?

What number is bigger than 13?


What number is smaller than 20?

What number is smaller than 24?

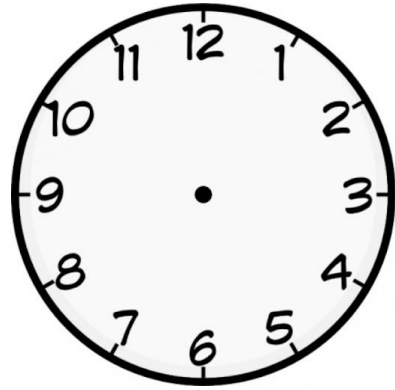


Time: hours and half hours


Draw hands on the clock faces:




2 o' clock



6 o' clock



half past 10



half past 3

How many hours are there in a day? _____

How many minutes are there in 1 hour? _____

How many minutes are there in half an hour? _____

Addition and subtraction up to 20



Quick recall.

$4 + 5 - 1 =$	$13 - 9 + 2 =$	$20 - 7 + 1 =$	$10 + 5 - 4 =$
$10 + 3 + 2 =$	$9 + 3 - 2 =$	$8 - 2 - 1 =$	$13 - 8 + 1 =$
$9 - 4 - 3 =$	$18 - 9 - 4 =$	$7 + 8 + 1 =$	$16 - 7 + 3 =$
$14 - 6 + 4 =$	$12 - 5 - 2 =$	$19 - 10 + 5 =$	$6 + 5 - 3 =$



Add the following.

	$=$ <input type="text"/> <input type="text"/> <input type="text"/> <input type="text"/> $+$ <input type="text"/> <input type="text"/> $=$ <input type="text"/> <input type="text"/>
	$=$ <input type="text"/> <input type="text"/> $+$ <input type="text"/> <input type="text"/>
	$=$ <input type="text"/> <input type="text"/>
	$=$ <input type="text"/>
	$=$ <input type="text"/> $+$ <input type="text"/>
	$=$ <input type="text"/> $+$ <input type="text"/>
	$=$ <input type="text"/>



Subtract the following.

		= <input type="text" value="10"/> <input type="text" value="6"/> - <input type="text" value="4"/>
		= <input type="text" value="10"/> - <input type="text" value="2"/>
		= <input type="text" value="8"/>

		= <input type="text"/> <input type="text"/> - <input type="text"/> <input type="text"/>
		= <input type="text"/> + <input type="text"/>
		= <input type="text"/>

		= <input type="text"/> - <input type="text"/>
		= <input type="text"/>



I bought 15 sweets. I ate 2. I gave my friend 4.
How many sweets do I have left?




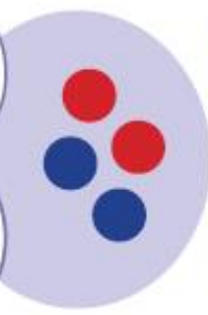







Teacher _____
Sign _____
Date _____



Date: _____

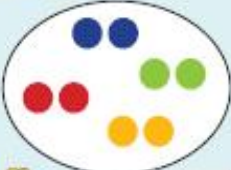
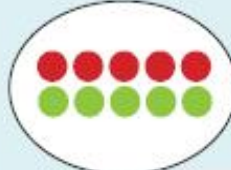

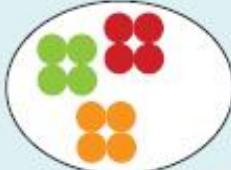
Yet more grouping and sharing

How many counters are in each circle? Share them equally between two children.







How many counters are in each circle?

			
<input type="text"/>	<input type="text"/>	<input type="text"/>	<input type="text"/>








Cut the shapes from Cut-out 4 and paste it in the correct block. Count the shapes.

	<input type="text"/>		<input type="text"/>
	<input type="text"/>		<input type="text"/>










Share the shapes between the children. Use the shapes from Cut-out 4. (Worksheet 60 section)

triangles		squares	
			
			



Share the fruit between the children. Draw them.



oranges		apples	
			
			



John and Belinda shared 12 sweets equally. How many sweets did each get?



Teacher: _____
 Sign: _____
 Date: _____

Word Problems

1. Sam scored 10 goals in soccer and Pat scored 15 goals. How many goals did they score altogether?

Sum: _____

Story: _____

2. The farmer's wife collected 56 eggs from the hen house. She accidentally broke 15 eggs. How many eggs were left?

Sum: _____

Story: _____

3. Tom had R20. His mum gave him R10 and his dad gave him R50. How much does he have altogether?

Sum: _____

Story: _____

4. Ann bought a packet of chips for R4,00 and a can of cool drink for R5,50. She paid with a R10 note. How much change did she get?

Sum: _____

Story: _____

