

## Maths Week 8

There were 46 balls on the playground. 20 were soccer balls and 15 were basketballs. The rest were tennis balls. How many were tennis balls?



30 children lined up to jump rope. 9 children joined them. 4 children left to get a drink of water. How many children were left in the line?



Dad caught 22 fish in the morning. He threw 5 back because they were too small. He caught 12 more in the afternoon. How many fish did dad have then?



At the park I saw 32 animals. I saw 12 dogs, 15 squirrels, and some frogs. How many frogs did I see?



Multiply the number on the side by the number in the roof

# Maths Rockets



x 2		x 3		x 4		x 5	
1		4		8		9	
2		2		4		2	
3		8		1		5	
4		1		5		7	
5		7		3		1	
6		0		0		8	
7		3		2		3	
8		5		9		6	
9		6		7		10	
10		9		6		4	

--	--

Calculations with money.



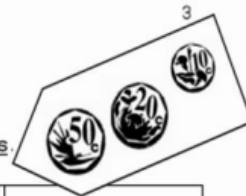
Remember:






$$R1 = 100c \quad \text{and} \quad R2 = 200c$$

$R1,00 = 100c$		
$100 - 10 = 90$	$100 - 20 = \dots\dots\dots$	$100 - 60 = \dots\dots\dots$
$R1 - 10c = 90c$	$R1 - 20c = \dots\dots\dots$	$R1 - 60c = \dots\dots\dots$
$100 - 50 = \dots\dots\dots$	$100 - 70 = \dots\dots\dots$	$100 - 90 = \dots\dots\dots$
$R1 - 50c = \dots\dots\dots$	$R1 - 70c = \dots\dots\dots$	$R1 - 90c = \dots\dots\dots$

Add up the coins. Write the cents.

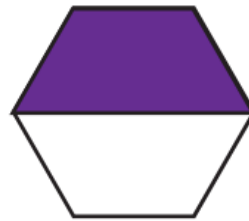
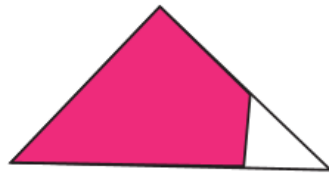
Add the cents to make the next full Rand. Fill in the Rands.




	$= 90c$	$+ R6.10$	$= R7.00$
	$= (\_\_c)$	$+ R2.20$	$= R\_\_.00$
	$= (\_\_c)$	$+ R9.90$	$= R\_\_.00$
	$= (\_\_c)$	$+ R4.70$	$= R\_\_.00$
	$= (\_\_c)$	$+ R3.50$	$= R\_\_.00$

# Identifying $\frac{1}{2}$

Look at the objects below.  
Circle the shapes that have  $\frac{1}{2}$  colored in.





Colour the numbers that are smaller than 10 in blue and bigger than 10 in red.

1	2	3	4	5	6	7	8	9	10
11	12	13	14	15	16	17	18	19	20

Colour the numbers that are smaller than 30 and bigger than 24 in green.

20	21	22	23	24	25	26	27	28	29	30
----	----	----	----	----	----	----	----	----	----	----

Colour the numbers that are smaller than 40 and bigger than 36 in yellow.

30	31	32	33	34	35	36	37	38	39	40
----	----	----	----	----	----	----	----	----	----	----

Colour the even numbers yellow and the odd numbers green.

1	2	3	4	5	6	7	8	9	10
11	12	13	14	15	16	17	18	19	20
21	22	23	24	25	26	27	28	29	30
31	32	33	34	35	36	37	38	39	40
41	42	43	44	45	46	47	48	49	50



Which odd number comes just after 10?

Which even number comes just before 10?

Write down the even numbers between 14 and 24.

Write down the odd numbers between 5 and 15.

Which odd number comes just after 21?

Which even number comes just before 24?

Write down the even numbers between 20 and 30.

Write down the odd numbers between 20 and 30.



Teacher: \_\_\_\_\_  
Sign: \_\_\_\_\_  
Date: \_\_\_\_\_

11 12 13 14 15 16 17 18 19 20