

Mathematics: Grade 1: 26 May 2020

Good morning Grade 1s. I hope all those who celebrated Eid, had a fabulous day.

Tuesday's work will be just oral revision.

Yesterday was _____ May 2020. Tomorrow will be _____ May 2020.

Yesterday was Monday. Today is _____. Tomorrow will be _____.

(Try and spell the days on your own aloud)

Practice bonds up to 10.


Revise spelling of numbers from 0 to 10.

Revise halving and doubling of even numbers.

Count forwards and backwards in 1's.

Count forwards in multiples of 10's, 5's and 2's

Look at the number grid in your flip file. Point to any number and say it aloud. Pronounce your numbers correctly.



Mathematics: Grade 1: 27 May 2020. Wednesday

Oral: Estimation. This is a big word. It actually means to guess.

Ask an adult to hold a few counters in their hands. (counters must not be more than 20) You must now guess how many they have in their hand. Now you can count them to see how close you were. Do this a few times.

Practice number bonds and counting forwards and backwards

Written work: Mass. What does this mean?

It means how heavy or light things are. When we go to the shop to buy vegetables, don't we weigh them after putting them into packets? The more vegetables we need the heavier they will be on the scale and the more expensive they will be.



10 Kgs



shutterstock.com • 1140500075

7Kgs



alamy stock photo

3Kgs

How many kgs are the onions? _____. The potatoes are _____ kgs. The _____ is 10 kgs.

Which is the heaviest? _____. Which is the lightest? _____.

By how many Kgs are the tomatoes heavier than the potatoes? _____.

By how many Kgs are the onions lighter than the potatoes? _____.

Story Sum:

If I paid R30 for the tomatoes, R20 for the potatoes and R10 for the onions, how much did I spend altogether? _____. (use your knowledge of counting in 10's to find the answer.)

If I paid with a R100 note, how much change will I get? _____. (use your knowledge of counting backwards in 10's to get your answer.)

Please note: For the next 2 days we will be doing a revision test and a Mental Test. Ask an adult to read the instructions to you.

Mathematics: Grade 1: 28 May 2020. Thursday

Let's do a **Number Operations** test today to see how much we remember.

Spell: 5 _____. 7 _____. 9 _____. 8 _____. 10 _____.

Write the numeral (number) three _____. **six**_____. **zero**____. **four**____ **one**_____.

Draw eight red triangles, four blue squares, three orange circles, nine green rectangles and ten black diamonds.

Half of:

Double:

Before:

After:

In between:

10 is _____.

3 is _____.

10 is _____.

5 is ____.

5 and 7 is ____.

2 is _____.

5 is _____.

2 is _____.

1 is ____.

3 and 5 is ____.

6 is _____.

2 is _____.

8 is _____.

3 is _____.

8 and 10 is ____.

4 is _____.

1 is _____.

1 is _____.

10 is ____.

1 and 3 is ____.

8 is _____.

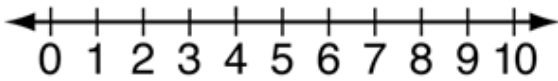
4 is _____.

6 is _____.

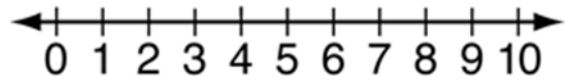
9 is _____.

6 and 8 is ____.

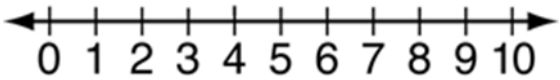
Find the answer on the number line:



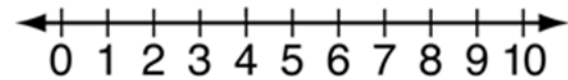
$7 + 3 = \underline{\hspace{2cm}}$.



$4 + 3 + 2 = \underline{\hspace{2cm}}$.



$6 - 2 = \underline{\hspace{2cm}}$.



$10 - 5 + 1 = \underline{\hspace{2cm}}$.

Arrange these numbers from biggest to smallest:

Arrange these numbers from smallest to biggest

4, 10, 6, 11, 15 _____, _____, _____, _____, _____.

12, 0, 8, 5, 2 _____, _____, _____, _____, _____.

Do these Bonds:

$2 + 7 = \underline{\hspace{1cm}}$. $10 - 4 = \underline{\hspace{1cm}}$. $6 + 3 = \underline{\hspace{1cm}}$. $8 - \underline{\hspace{1cm}} = 4$.

Mathematics: Grade 1: 29 May 2020. Friday

Let's hope you performed well in yesterday's test. I am sure most of you got all right. Well done!

Oral: Count in 2's from 0 to 50.

Bonds: Practice number bonds.

Calendar: Say all the days and months of the year. Remember, try learning to spell the days of the week.

Today is Friday, so it is Mental Test.

Ask an adult to read the questions to you. Write numbers 1 to 10 next to the margin. Next to each number, just write the answer, not the whole sum.

1. $10-6=$ _____.
2. Spell 9 _____.
3. Write the number zero _____.
4. $6+4-1=$ _____.
5. Half of 8 is _____.
6. 2 more than 7 is _____,
7. Before 9 is _____.
8. 30 , 40, 50, _____.
9. 14, 16, _____, 20.
10. There are _____ days in May. /10

Well done if you got 10/10.

Have a fabulous weekend!!

Stay safe and blessed!!