

Mathematics: Grade one 28 September to 2 October

Dear Parents

Please note that this will be the last week for online support for home based learners for this term.

Please be reminded that assessments for this week are Language, Reading and Mathematics. Please revise sentence construction, plurals, vowels, is/are, was/were, phonics-application of blends eg. At, et, it, ot, ut etc. Reading includes reading from a simple passage where learners are required to apply their phonic and word recognition skills. Mathematics includes Data Handling (Pictographs), Measurement, Space and shape, and Patterns.

Also remember next week's assessments (5 October) . Revision must be done for Number Operations (Spelling of numbers up to 15, Halving /Doubling, Number lines, Story Sums, Before/After/In between/More/Less.) Learners must be prepared for their talk on Water (5 simple sentences)

Please help learners revise so that they can be prepared. Learners must carry all their stationery and a packed lunch as they will have a break between assessments. Please pick up learners timeously at 11. 30. Thanks for your cooperation.

Oral work for this week 28 September to 2 October

Learn bonds up to 15.

Spell numbers up to 15

Remember to do all your counting backwards and forwards 1's, 2's, 5's, 10's.

Revise Halving/ Doubling

Written work for this week:

Practice number formation for numbers 10, 11, 12, 13, 14, and 15.

Spell:

11 _____ 12 _____ 13 _____ 14 _____ 15 _____

Draw pictures for each number word:

Fifteen _____

Twelve _____

Fourteen _____

Eleven _____

Ten _____

2 more than 12 is _____. 1 less than 14 is _____. 1 more than 11 is _____ 2 less than 15 is _____.

Story Sum:

Share 12 sweets between 2 children. Each child gets _____ sweets.(Draw to get your answer)

Today we are going to do:

Half of: 14 is ____ 12 is ____ 6 is ____ 4 is ____ 2 is ____ 8 is ____ 10 is ____

Double: 7 is ____ 3 is ____ 5 is ____ 2 is ____ 6 is ____ 1 is ____ 4 is ____ 3 is ____

Before 14 is ____ 12 is ____ 10 is ____ **After** 10 is ____ 15 is ____ 11 is ____

In between: 3 and 5 is ____ 1 and 3 is ____ 12 and 14 is ____ 10 and 12 is ____

Do these sums:

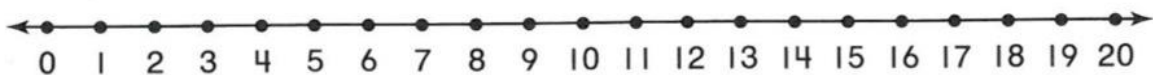
$2 + 10 =$ _____ $14 - 3 + 1 =$ _____ $15 - 3 =$ - ____ $5 + 5 + 5 =$ _____ $10 + 4 =$ _____ $13 - 4 =$ _____

Fill in the missing number:

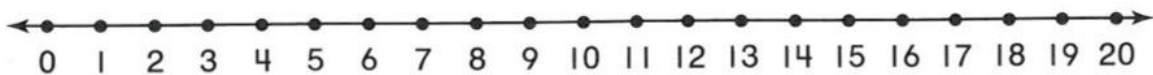
20, 30, _____, 50, _____ 95, 90, _____80, _____ 14, _____, 18, 20, _____

Find these answers on the number line:

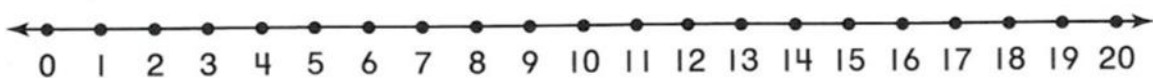
$9 + 3 =$ ____



$14 - 7 =$ ____



$5 + 3 + 2 =$ _____



Story Sums

4 cars have _____ wheels. (Draw to help you get your answer.)

Workbook work for this week: We are learning all about money and change. We have already done a few story sums on Money. Remember when you calculate change, you have to take away what you spent from what you had.

Money: pages 22 and 23 ,24 and 25.

Mental Test for Friday:

1. Half of 14 is _____.
2. 6 doubled is _____.
3. $7 + 3 =$ _____.
4. Spell 11 _____.
5. Write the number thirteen _____.
6. $14 - 3 =$ _____.
7. Before 15 is _____.
8. Half of 12 plus 2 is _____.
9. In between 13 and 15 is _____.
10. Half of 20 is _____.

