

Grade 1: Mathematics

Day 1: Monday

Calendar Work: Yesterday was 19th April 2020.

Today is.....

Tomorrow will be.....

Counting: Count in ones, twos, fives and tens up to 50. Point to the numbers on your number grid in the flip-file.




Mental Maths: Bonds up to 10. Spelling of numbers from 0 to 10.

Written work:

Practice number formation from 0 to 10. Do 5 rows. Avoid reversals.

0 1 2 3 4 5 6 7 8 9 10

Fill in. Number 1 is done as an example.

Number Symbol	Number Word	Pictures
1	one	
	five	
7		
		
	ten	
8		
		
9		
	six	

Before:

7 is

9 is

6 is

After:

5 is

8 is

0 is

In between:

7 and 9 is

3 and 5 is

4 and 6 is

Grade 1 Mathematics

Day 2: Tuesday 21 April 2020

Counting: Random recognition of numbers from 0 to 50. Point to numbers randomly on number grid and say it aloud.

Mental Maths: Daily revision of Bonds and Numerosity (before, after, in between)

Written work: Number Sequencing:

0 2 4 6 _____ 10 1 3 _____ 7 _____ 11 10 9 8 7 _____

10 20 30 _____ 50 _____ 0 5 10 _____ 20 7 6 _____ 4 _____ 2

Hint: Practice many more examples in number sequencing.

Do these sums:

$5 + 2 =$; $10 - 4 =$; $3 + \dots = 7$; $6 - \dots = 2$; $10 + 10 + 10 =$; $7 + 3 =$; $10 - 5 - 2 =$; $4 + 3 + 2 =$; $6 + 4 =$

More and Less:


1 more than 7 is _____ 2 less than 10 is _____ 3 more than 5 is _____
2 less than 10 is _____

Story Sums:

There are 10 birds on a tree. 3 flew away. Now there are _____ birds left on the tree.



There are 5 children in a school bus. 2 came in. 1 jumped off. Now there are _____ children in the school bus.



Grade 1 Mathematics

Day 3: 22 April 2020

Counting: Count in ones from 0 to 50. Count in twos from 0 to 50. Count in fives from 0 to 50. Count in tens.

Calendar Work:

Say the days of the week and months of the year aloud.

Yesterday was _____. Today is _____. Tomorrow will be _____.

Mental Maths: Revise Bonds daily.

Written Work: Circle the smallest number:

4 3 5	10 9 11	15 13 11	0 10 20
-------	---------	----------	---------

Circle the biggest number:

5 2 6	10 4 7	12 9 3	13 10 6
-------	--------	--------	---------

Complete this number grid:

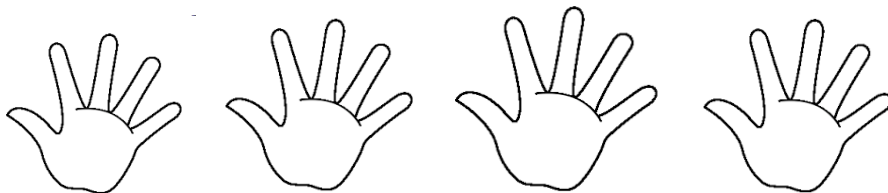
1	2		4		6	7		9	
11				15	16				20
21	22				26				30

Count the shoes in 2's:



Write a Sum: _____ + _____ + _____ + _____ + _____ = _____

Count the fingers in 5's:



Write a Sum: _____ + _____ + _____ + _____ = _____

Grade 1 Mathematics

Day 4: 23 April 2020

Calendar: Yesterday was _____. Today is _____. Tomorrow will be _____.

Counting: Count on in 2's from 14; 16; 18; Count on in 5's from 15; 20; 25; Count on in 10's from 20; 30;

Mental Mathematics: Daily revision of Bonds. Spelling of numbers from 0 to 10.

Written Work:

Doubling: Adding Doubles is no trouble. You add two numbers same as each other. Have fun and practice and you will keep them in your brain. Let's add doubles eg 1 doubled is 2 $1+1=2$

Do these:

1 doubled is _____ 2 doubled is _____ 3 doubled is _____ 4 doubled is _____ 5 doubled is _____.

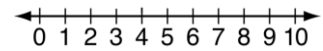
Now learn your doubles up to 10.

Match the number to the word:
line:

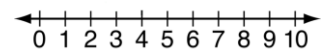
0	three
1	five
2	ten
3	six
4	eight
5	nine
6	two
7	zero
8	one
9	seven

Revise your sums on the number

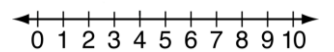
$7 + 3 = \underline{\quad}$



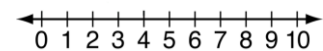
$8 - 5 = \underline{\quad}$



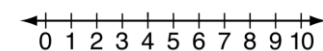
$4 + 5 = \underline{\quad}$



$3 + 2 - 1 = \underline{\quad}$



$10 - 5 - 3 = \underline{\quad}$



Count on in 2's from 2: 2; 4; ____ ; 8 ____

Count backwards in 1's from 17;

Count backwards in 2's from 10; 8; ____;

Count on in 5's from 0; 5; ____; 15 ____ 25; 30

10

four

Count in 1's from 23; 24; 25 ____; ____; ____

Tom won 5 marbles. Tim won double Tom's marbles. How many did Tim



win ____.



2 cats have ____ paws.

Grade 1 Mathematics

Day 5: 24 April 2020

Counting: Counting in 1's; 2's; 5's; 10's

Calendar: Yesterday was _____. Today is _____. Tomorrow will be _____.

Mental Test: Hint: Dear parent, read out questions to your child. He or she just writes down the answer after mentally calculating it. The test is out of 10.

1) Spell 7 _____

2) Write the number symbol ten _____

3) $4 + 3 =$ _____

4) $8 - 4 =$ _____

5) Before 7 is _____

6) 2 more than 8 is _____

7) After 0 is _____

8) 3 less than 6 is _____

9) In between 8 and 10 is _____

10) 4 doubled is _____

(10)

Well done if you got 10/10!!

Now you can have a super Saturday and Sunday.

