

Look at the clocks below. Indicate how much time has passed:



How much time has passed?

\_\_\_\_\_

\_\_\_\_\_

\_\_\_\_\_



How much time has passed?

\_\_\_\_\_

\_\_\_\_\_

\_\_\_\_\_




How much time has passed?

\_\_\_\_\_

\_\_\_\_\_

\_\_\_\_\_



Calculate the following sums:

1.  $R2,50 + R2,50 =$  \_\_\_\_\_

2.  $R10,00 - R4,50 =$  \_\_\_\_\_

3.  $R14,00 + R10,00 =$  \_\_\_\_\_

4.  $R8,50 - R3,50 =$  \_\_\_\_\_

5.  $R9,00 + R5,50 =$  \_\_\_\_\_

Solve the following word problems:

1. Luke saves R15 every month. How much money will he save within 3 months?

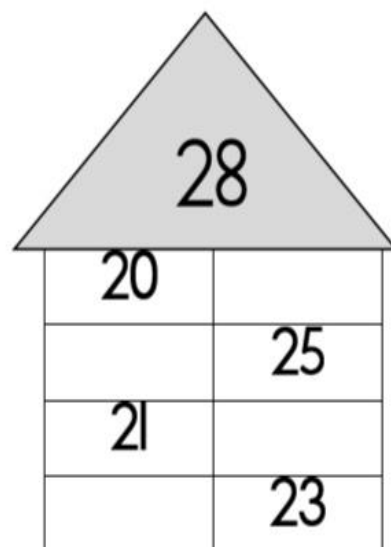
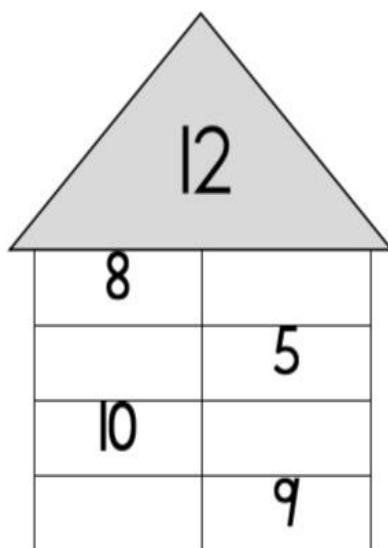
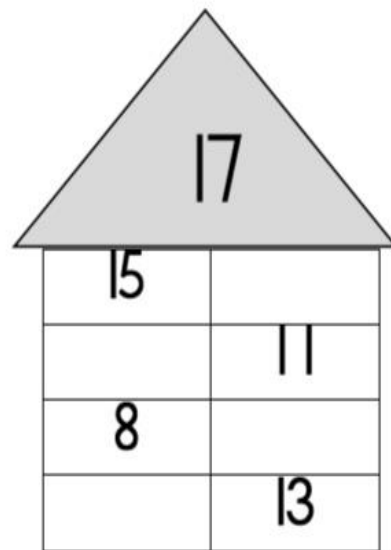
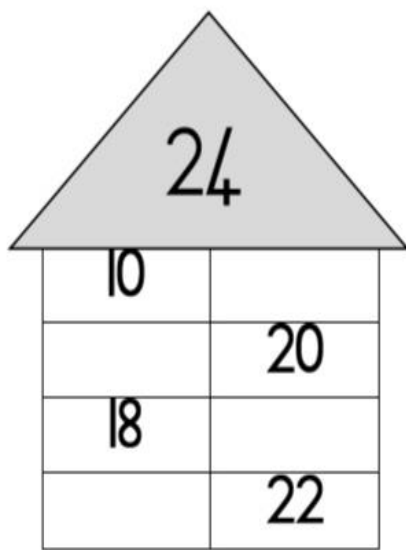
\_\_\_\_\_  
\_\_\_\_\_

2. Linda buys a dress for R43. She pays with a R50 note. How much change must she get?

\_\_\_\_\_  
\_\_\_\_\_

## Number combinations:

- Fill in the correct number so that the two numbers next to each other adds up to the number in the roof of the house:















# Word Problems

Name \_\_\_\_\_

Date \_\_\_\_\_








## ADDITION & SUBTRACTION PROBLEMS TO 50 SHEET 1

These problems do not involve carrying or regrouping.		WORKING OUT
1)	I have 24  . I buy 13  more. How many do I have now? _____	
2)	There are 25  . 14  fly away. How many are left? _____	
3)	I have 22  . I buy 11  more. How many  in all? _____	
4)	Jack has 13  . Jill has 23  . How many altogether? _____	
5)	There are 38  . 12  swim away. How many  are left? _____	
6)	Captain has 24  . Sally has 22  . What is the difference? _____	

## Data Handling

Ria interviews 20 people and asks them which ice-cream flavour is their favourite. She made a pictogram with the details she gathered:

Here is what she found:

Flavor	No. of people
Vanilla	
Chocolate	
Strawberry	
Pineapple	
Peach	

Now, read the above table and answer the following questions:

1. Which ice cream flavour do you think is most popular choice?
2. Which ice cream flavour do you think is least popular choice?
3. How many people chose vanilla as their favourite ice cream flavour?
4. What is the difference between the most popular and least popular flavour?
5. Which ice cream flavour does you like the most?

