

Activity booklet


Grade 2



Count the smiling faces below:

Estimate how many faces are there: _____

Circle the faces in groups of 5. Count the faces in 5's and write how many face are there:



Amount of faces? _____



Write down the following number symbols:

(Remember: It is the number.)

sixty nine	
ninety three	
one hundred and four	
one hundred and twenty six	
eighty seven	
one hundred and forty one	

Now write the number name:

(Remember: It is the number written in words.)

26	
14	
33	
12	
29	
32	
18	
17	

Arrange the following numbers from biggest to smallest:

1. 13, 31, 23, 32, 21, 30, 29

2. 41, 21, 14, 12, 50, 44, 22

Arrange the following numbers from smallest to biggest:

1. 38, 44, 8, 28, 18, 16, 36

2. 42, 22, 12, 50, 32, 21, 11

Fill in <, > or =


1. 23 _____ 32

2. 48 _____ $36 + 6$

3. 14 _____ $20 - 6$

4. 27 _____ 42


5. 31 _____ 13



Solve the following word problems by using repeated addition that leads to multiplication:

• e.g. $2 + 2 + 2 = 6$

$2 \times 3 = 6$



Draw pictures to help you.

One cow has 4 legs. How many legs will 4 cows have?

Grumpies are little creatures with 5 arms. How many arms will 3 grumpies have?

There are 9 children at my party. Each child has 2 eyes. How many eyes are there all together?

Father makes food in a pot. The pot has 3 legs. How many legs will 7 pots have?

Write down the number that is 5 more than:

1. 16 _____

3. 11 _____

2. 20 _____

4. 34 _____

Write down the number that is 6 less than:

1. 16 _____

3. 11 _____

2. 20 _____

4. 34 _____

Break up the following number into tens and units:

• e.g. 14 \rightarrow 10 + 4

24 = _____

12 = _____

19 = _____

20 = _____

11 = _____

25 = _____

17 = _____

22 = _____

