

Telling Time

Draw a line to connect the matching times.



12 : 25



11 : 20



10 : 15



9 : 10



8 : 55



Telling Time

Draw a line to connect the matching times.



10 : 55



3 : 45



11 : 05



9 : 45



4 : 40



Telling Time

Write the time inside each clock below



--	--	--



--	--	--



--	--	--

(A)
10 : 55

(B)
4 : 40

(C)
9 : 45

(D)
12 : 25

(E)
10 : 15

(F)
8 : 50


(G)
9 : 10

(H)
4 : 00


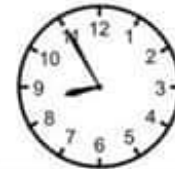
(I)
11 : 20

Telling Time

Write the time inside each clock below



--	--	--



--	--	--



--	--	--

(A)
10 : 55

(B)
4 : 40

(C)
9 : 45

(D)
12 : 25

(E)
10 : 15

(F)
8 : 50

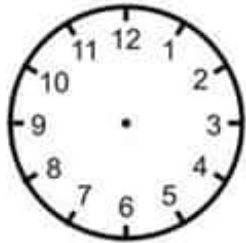
(G)
9 : 10

(H)
4 : 00

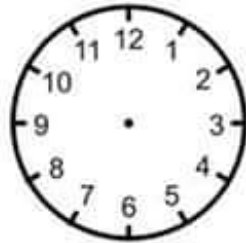
(I)
11 : 20

Telling Time

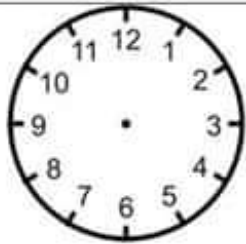
Draw hands on the clock face to show time



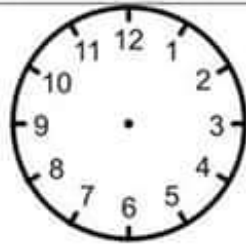
12 : 25



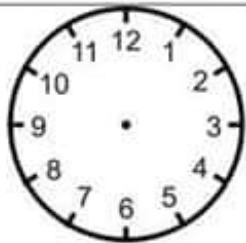
11 : 20



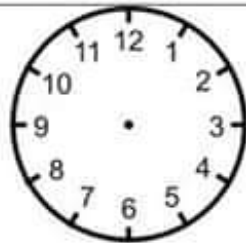
10 : 15



9 : 10



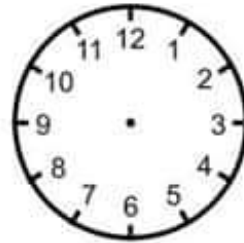
8 : 55



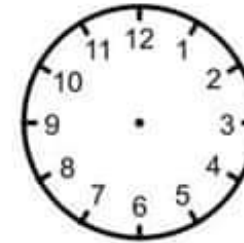
7 : 50

Telling Time

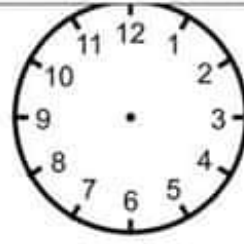
Draw hands on the clock face to show time



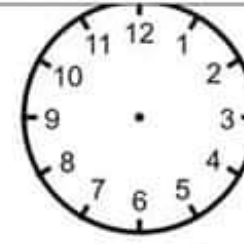
10 : 55



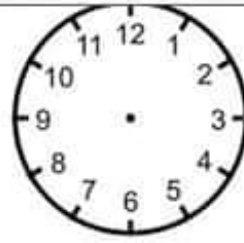
3 : 45



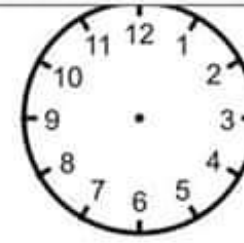
11 : 05



9 : 45



4 : 45



1 : 10