

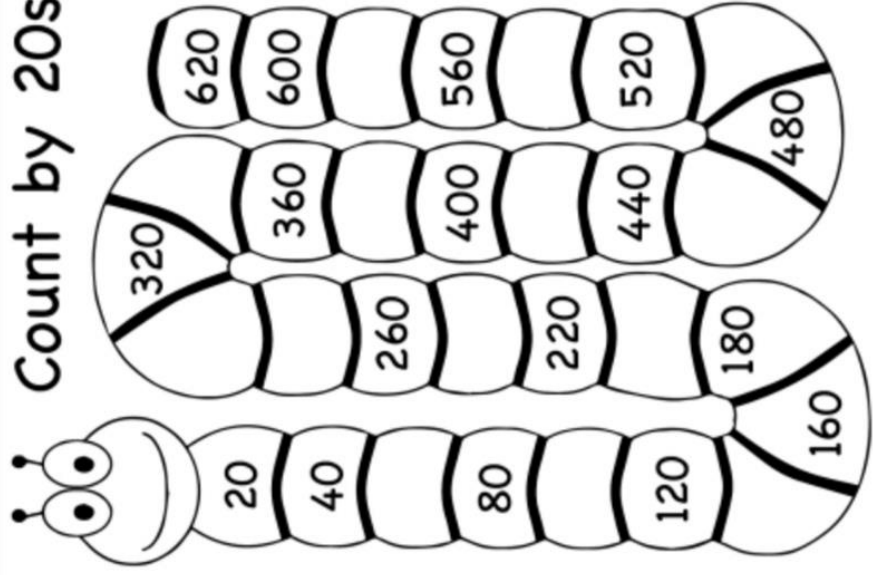
Grade 3 - Week 1: Counts in 20's, 25's, 50's, 100's, Forwards and Backwards to 200

Please remember to point to the number when you count in 20's, 25's, 50's and 100's

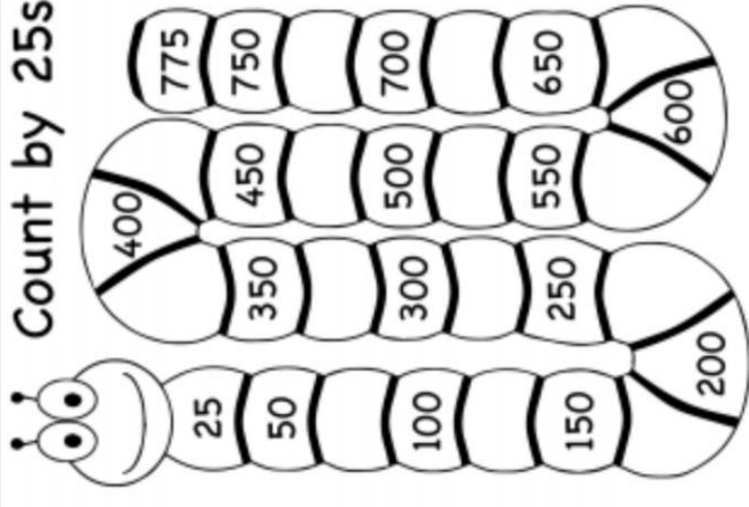
NUMBER CHART

1	2	3	4	5	6	7	8	9	10
11	12	13	14	15	16	17	18	19	20
21	22	23	24	25	26	27	28	29	30
31	32	33	34	35	36	37	38	39	40
41	42	43	44	45	46	47	48	49	50
51	52	53	54	55	56	57	58	59	60
61	62	63	64	65	66	67	68	69	70
71	72	73	74	75	76	77	78	79	80
81	82	83	84	85	86	87	88	89	90
91	92	93	94	95	96	97	98	99	100
101	102	103	104	105	106	107	108	109	110
111	112	113	114	115	116	117	118	119	120
121	122	123	124	125	126	127	128	129	130
131	132	133	134	135	136	137	138	139	140
141	142	143	144	145	146	147	148	149	150
151	152	153	154	155	156	157	158	159	160
161	162	163	164	165	166	167	168	169	170
171	172	173	174	175	176	177	178	179	180
181	182	183	184	185	186	187	188	189	190
191	192	193	194	195	196	197	198	199	200

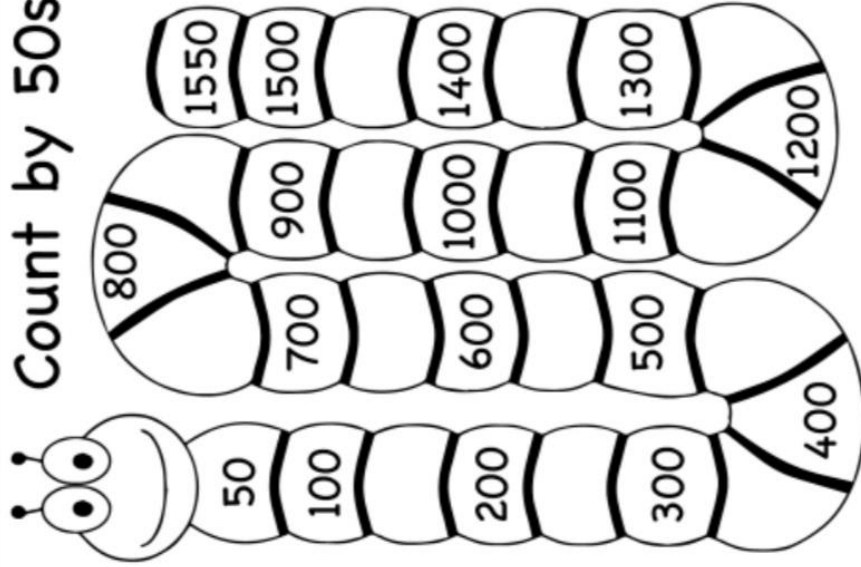
## Count by 20s



## Count by 25s



# Count by 50s



Grade 3 - Week 1: Number of the day | - 30

$----- + 2 = 30$

$9 + ----- = 30$

$12 + ----- = 30$   
30

$----- + 28 =$

$----- + 10 = 30$

$29 + ----- = 30$

$11 + ----- = 30$

$----- + 20 = 30$

$----- + 25 = 30$

$23 + ----- = 30$

$21 + ----- = 30$

$----- + 3 = 30$

$----- + 27 = 30$

$4 + ----- = 30$

$22 + ----- = 30$


$----- + 4 = 30$

Grade 3 – Week 2: 2D Name the Shapes

circle	square	rectangle
oval	triangle	octagon
hexagon		




\_\_\_\_\_



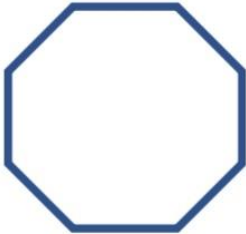
\_\_\_\_\_



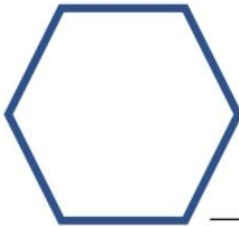
\_\_\_\_\_



\_\_\_\_\_



\_\_\_\_\_



\_\_\_\_\_